

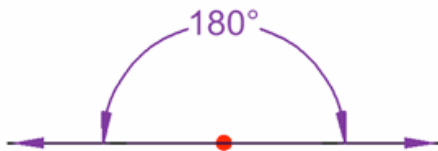
Brainy Bunch Homework Packet

Week of April 18, 2016

1. Practice math facts.

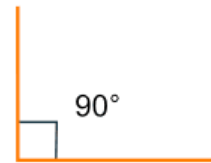
2. In *Sir Cumference and The Great Knight of Angleland* Radius uses what he learned about angles from Sir D'Grees in his quest to find the missing king. Your quest is to find and record examples of each type of angle shown below. You may use words, pictures or both to record your examples. Organize them in some way - a chart, list, etc. **BONUS:** Measure the angles and record the degrees also.

A straight angle is 180 degrees



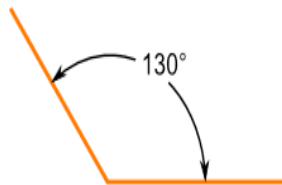
This is a straight angle

A right angle is an internal angle which is equal to 90°



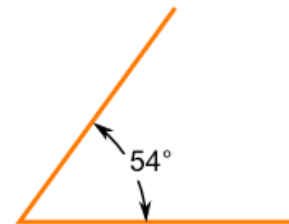
This is a right angle

An **Obtuse Angle** is more than 90° but less than 180°



This is an obtuse angle !

An **Acute Angle** is less than 90°



This is an acute angle